


Section 1-Multiple Choice Questions


1. Which picture is a push?

[3]



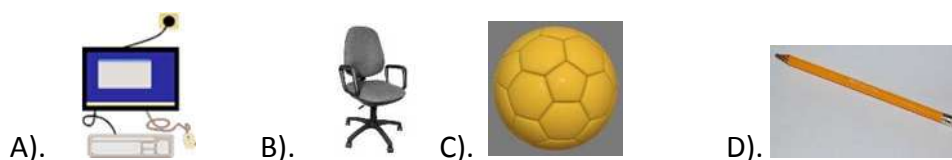
2. Which picture is a pull?

[3]




3. Which object uses electricity?

[3]




4. What does the torch need to work?

[3]



5. Which picture gives us sound?

[3]



6. Circle the picture that is safe?

[3]




7. What is the best way to conserve light energy?

[3]

- A). leave the lights on when in the room
- B). turn off lights when not in the room
- C). turn on the water when not in the room
- D). leave on the water when not in the room


8. Which is the best light bulb to use to save energy?

[3]



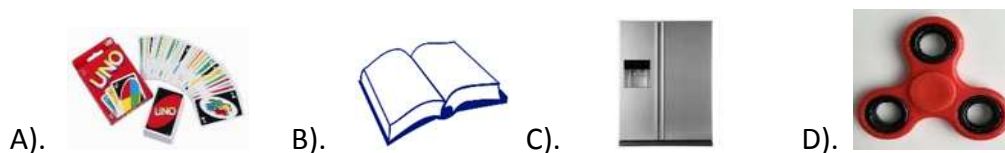
9. Which object provides heat energy?

[3]



10. Which picture uses electricity?

[3]





11. How does a table feel?

[3]

- A). dull
- B). soft
- C). shiny
- D). hard



12. What is the bottle made from?

[3]

- A). fabric
- B). plastic
- C). rubber
- D). wood

13. Which picture is made out of glass?

[3]



14. What material is the shirt made from?

[3]

- A). rubber
- B). paper
- C). paper
- D). cotton



15. Where does paper come?

[3]



16. Why do people use plastic cups for?



[3]

- A). to drink
- B). to eat
- C). to build
- D). to throw

17. Rubber comes from_____?

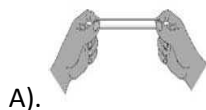


[3]

- A). trees
- B). plastic
- C). wood pulp
- D). crude oil

18. Which picture shows a squeezed?

[3]



19. Which material is the table made from?



[3]

- A). stone
- B). glass
- C). wood
- D). metal

20. Which material is used for this wall?




[3]


- A). brick
- B). glass
- C). plastic
- D). concrete


Section 2: Other Type Questions


21. Use the words from the box to write the name of the material. [12]


| | | | |
|----------------|---------------|--------------|--------------|
| plastic | metal | glass | wood |
| brick | fabric | stone | paper |


- A).


- B).


- C).


- D).


- E).








- F).


22. Look at the picture. Write a sentence on how to save energy. [4]





23. Check ✓ the pictures as either the source is directed electricity or battery.

[12]

| | Direct Electricity | Battery |
|----------------------------------------------------------------------------------------------|--------------------|---------|
|  kettle | | |
|  fan | | |
|  calculator | | |
|  microwave | | |
|  game | | |
|  watch | | |

24. Check ✓ the pictures as either sound or heat.

[12]

| | Sound | Heat |
|------------------------------------------------------------------------------------------------|-------|------|
|  blender | | |
|  toaster | | |
|  hand mixer | | |
|  drill | | |
|  kettle | | |
|  heater | | |