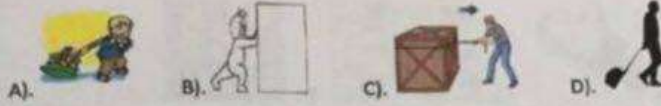


Section 1-Multiple Choice Questions

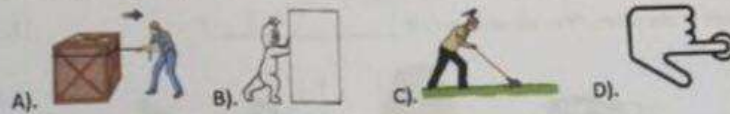
1. Which picture is a push?

[3]



2. Which picture is a pull?

[3]



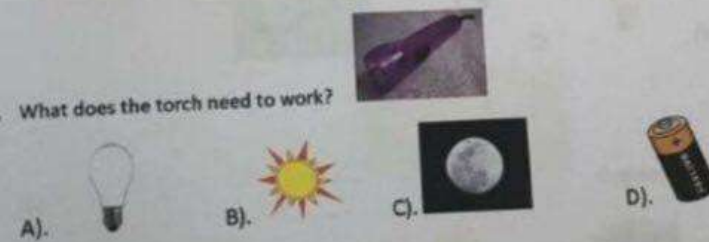
3. Which object uses electricity?

[3]



4. What does the torch need to work?

[3]



5. Which picture gives us sound?

[3]




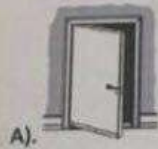
[3]

6. Circle the picture that is safe?



7. When you are not in the room, "You should turn off _____?"

[3]



8. Which is the low energy light bulb?

[3]



9. Which object wastes heat energy?

[3]



10. Which picture uses energy?

[3]



11. How does a teddy bear feel?



- A). hard
- B). shiny
- C). dull
- D). soft

[3]


12. What is the basket made from?



- A). wood
- B). glass
- C). plastic
- D). fabric

[3]

13. Which picture is made out of rubber?



A).

B).

C).

D).

[3]


14. What is the name of this material?



- A). plastic
- B). cotton
- C). paper
- D). rubber

[3]

15. Where does paper come from?



A).

B).

C).

D).

[3]



16. Why do people use this plastic bag?

- A). eat
- B). drink
- C). carry things
- D). play with

[3]



17. Rubber comes from _____?

- A). trees
- B). plastic
- C). wood pulp
- D). crude oil

[3]

18. Which picture shows stretching?



[3]

19. Which material is the pencil made from?

- A). metal
- B). wood
- C). glass
- D). stone



[3]

20. Which material is used for this building?

- A). metal
- B). glass
- C). plastic
- D). concrete



[3]

21. Use the words from the box to write the name of the material.

[12]

plastic	metal	glass	wood
brick	fabric	stone	paper



















22. Look at the picture. Write a sentence on how to save energy.







[4]



23. Check ✓ the pictures as either the source is directed electricity or battery. [12]

	Direct Electricity	Battery
 cell phone		
 TV		
 torch		
 lamp		
 remote		
 clock		

24. Check ✓ the pictures as either sound or heat. [12]

	Sound	Heat
 radio		
 stove		
 vacuum		
 clock		
 iron		
 hot plate		