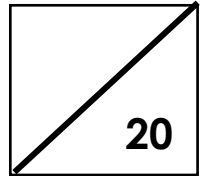


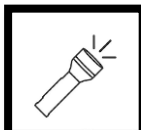




Name: \_\_\_\_\_ Grade 1: \_\_\_\_ Date: \_\_\_\_\_




**Complete the table below (5)**



<b><u>Heat</u></b>	<b><u>Light</u></b>	<b><u>Sound</u></b>
		
		
		
		
		

**Circle the correct answer (5)**

1. Which picture gives us **heat and light** energy?



2. **Loud sounds** - make a Circle ● **soft sounds** – make a square ■



**Circle the correct answer (4)**

1. \_\_\_\_\_ makes things work or change.

- a. Force
- b. Energy
- c. Matter

2. *Light* is a form of energy we can:

- a. See
- b. Hear
- c. Feel

3. Small vibrations makes:

- a. Loud sounds
- b. Soft sounds

4. How can you make a loud sound with this drum?

- a. Beat it *heavily*.
- b. Beat it *lightly*.
- c. Beat it *slowly*.



**Draw objects that give us: (6)**

Heat energy (2)	Light energy (2)	Sound eenergy (2)



## Grade 1 States of Matter: Science Test

Name: \_\_\_\_\_









Total

/25

Answer all Questions:

1.

Look at the items below and determine whether they are solids, liquids, or gases.

1. 	2. 	3. 	4. 
solid   liquid   gas	solid   liquid   gas	solid   liquid   gas	solid   liquid   gas
5. 	6. 	7. 	8. 
solid   liquid   gas	solid   liquid   gas	solid   liquid   gas	solid   liquid   gas

/8

2. Using the Word Box write the word that matches with the picture

/12

Gas, liquid, ice, log-solid , steam, air



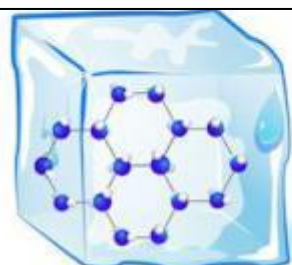

### Question 3:

*Draw a line connecting the pictures on the left to the matching phase of matter on the right.*



/3

### Question 4: Label these things as either: Solid, Liquid or Gas



**Liquid**



## Science Practice Test:




### Motion-Energy & State of Matter

#### Grade 1:


Name: \_\_\_\_\_

Please answer all the questions.

#### 1. Tick what type of energy you see. 3 marks

Neon Sign	Sun	TV
		
Natural or People Made?	Natural or People Made?	Natural or People Made?
Light _____ Heat _____	Light _____ Heat _____	Light _____ Heat _____


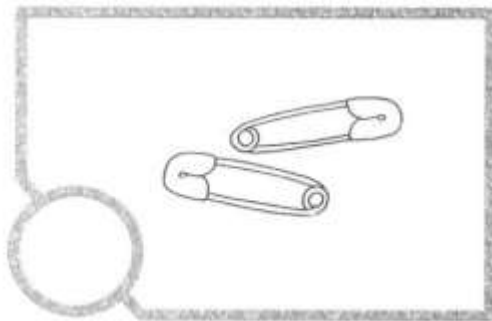
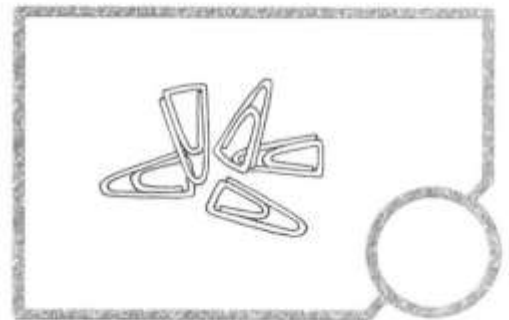
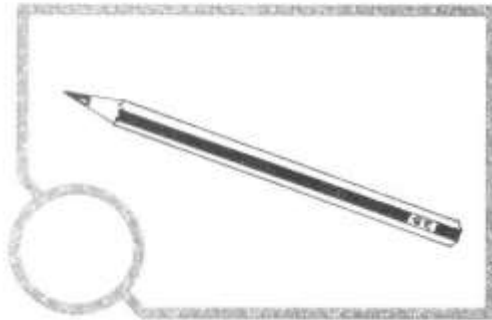
#### 2. Under each image, determine if the form is: Heat, Light or Sound.



\_\_\_\_\_

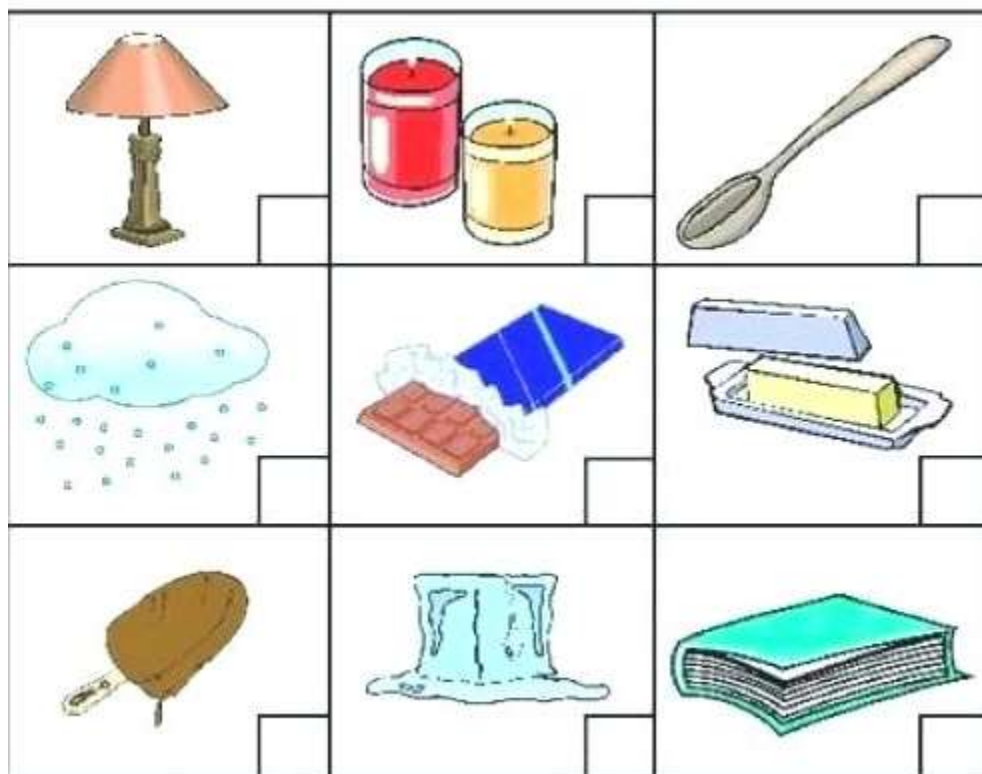
3.

Tick (✓) if the object can be attracted to a magnet.  
Cross (✗) if the object cannot be attracted to a magnet.



4 Marks

4. What things melt when heated Tick or x



### 5. Fill in the blanks

**Pull Push Speed Friction Position gravity**

1. \_\_\_\_\_ or \_\_\_\_\_ can create movement.
2. \_\_\_\_\_ is how fast or slow something moves
3. \_\_\_\_\_ is when two objects rub together and reduce speed.
4. \_\_\_\_\_ where something is placed.
5. \_\_\_\_\_ is the force that pulls things to the ground.

**Total Marks**

**/25**