

Name: _____ Grade 1: ____ Date: _____

Circle the correct answers (5)

1. _____ are how something looks, feels, Smells, sounds and tastes
 - a. Temperature
 - b. Properties
 - c. Shadows
2. Wood , plastic, rubber and metal are examples of:
 - a. Materials
 - b. Liquids
 - c. Gases
3. A _____ makes smaller things look larger?
 - a. Ruler
 - b. Thermometer
 - c. Hand lens
4. When a solid object blocks the light it is called a:
 - a. Shadow
 - b. Property
 - c. Liquid
5. What does this picture show?
 - a. Floating
 - b. Sinking
 - c. Solubility








Fill in the correct answer (4)

<u>Gases</u>	<u>Liquid</u>	<u>Matter</u>	<u>Solid</u>
---------------------	----------------------	----------------------	---------------------

1. All things are made of _____.
2. A _____ does not have its own shape.
3. A _____ has a shape of its own.
4. The air is made of different _____

What are the following solid objects made from? (5)

Wood	Plastic	Rubber	Glass	Metal
				
				
				
				
				

Match the tools with their function. (4)**Ruler**

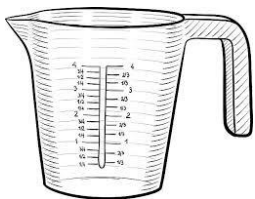
Measures the temperature.

**Balance**

Measures how much space a liquid can take up.


**Thermometer**

Measures length.

**Measuring Cup**

Measures mass.

Circle the correct form of matter (5)

	Solid Liquid Gas		Solid Liquid Gas
	Solid Liquid Gas		Solid Liquid Gas
	Solid Liquid Gas		Solid Liquid Gas
	Solid Liquid Gas		Solid Liquid Gas
	Solid Liquid Gas		Solid Liquid Gas

Label which liquid flows ***quickly*** and which flows ***slowly***

