

Name: .....

SCENCE WORKSHEET (1)

GRADE 3 .....

LESSON 1: MOTIONChoose the letter of the correct answer.

1. It is the measure of how fast something moves.

a. motion

b. speed

c. movement

2. \_\_\_\_\_ is movement.

a. speed

b. time

c. motion

3. Which one goes fast?

a.



b.



c.



4. This ride moves \_\_\_\_\_.

a. round and round


b. back and forth

c. zigzag



5. Which object shows rolling?


a.



b.



c.



## True or False

\_\_\_\_\_ 1. When something is in motion, it is moving.




\_\_\_\_\_ 2. Walking, running, and jumping are movements.



\_\_\_\_\_ 3. Planes fly slowly and turtles walk fast.



\_\_\_\_\_ 4. The balance moves up and down.



\_\_\_\_\_ 5. Speed is the measure of how hot or cold something is.