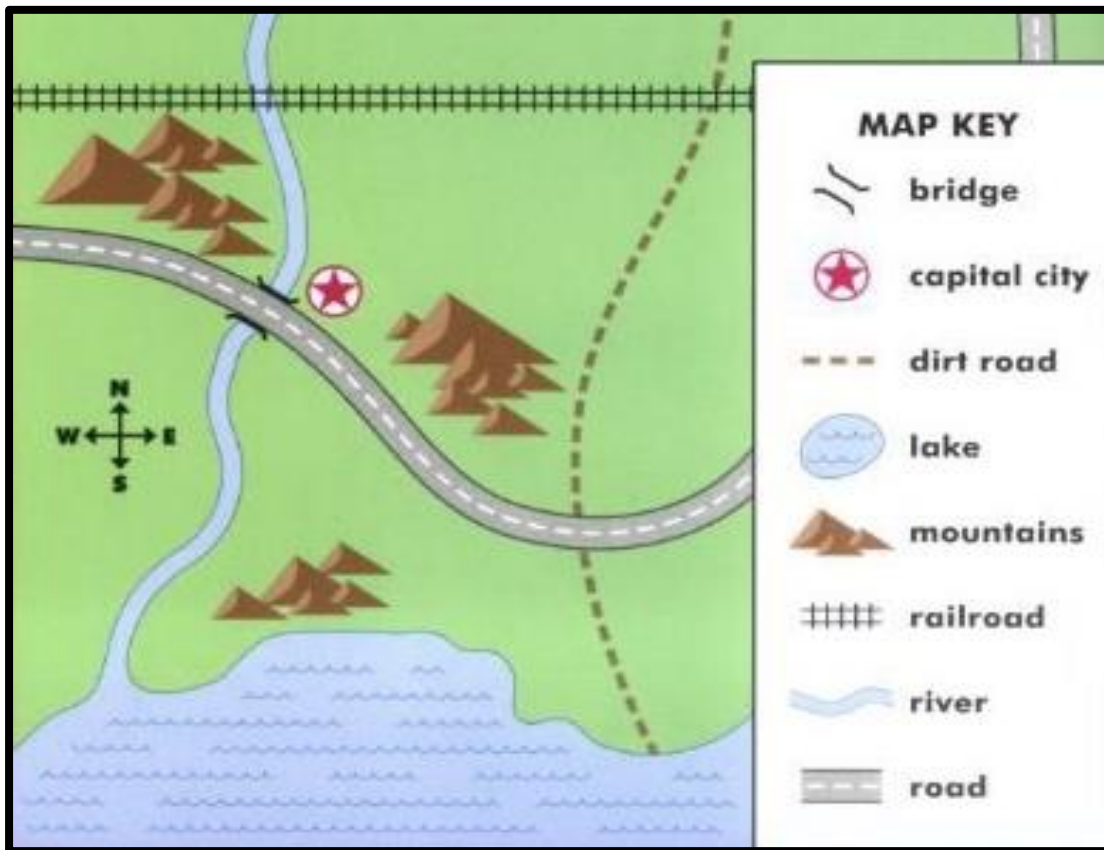



Quiz 1 : lesson 1 local Landscapes and lesson 2 : land on land

Name: .....Grade 2: .....

20

Question 1 : Look for the map then put true or false :

1. (        ) The lake in the south .
2. (        ) There are one mountains in this city .
3. (        ) There no bridge in this map .
4. (        ) There are railroad in the north .
5. (        ) Maps use to share information with other .
6. (        ) symbol of capital city is 

Question 2 : Match the word with the picture below

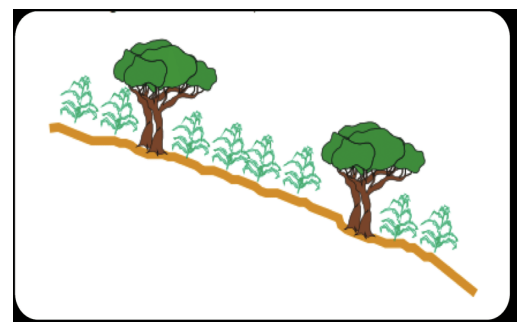
Landscape

slope

Symbols

Compass rose

Map



**Question 3 : Write the word in correct place :**

Symbol	landscape	Compass rose	Map
--------	-----------	--------------	-----

1- (.....) see in the map key.

2-( ..... ) stretch of land that can be seen from a place .

2- (.....) drawing of an area of earth's surface .

4- (.....) it on the map to show direction .

**Question 4 : Multiple Choice**

1-Circle **landscape** ?



A



B



C



D

2-Which of this is **compass rose** ?



A



B



C



D

3-Which of this is **map** ?



A



B



C



D

4-Circle **symbols** in key map ?



A



B



C



D

5-Which of this **slope** land ?



A



B




C



D



Question 5 : Label landform in next diagram :



Question 6 : Multiple Choice

1- A \_\_\_\_ is **tallest** kind of landform on earth .

- A. Valley
- B. Hill
- C. Mountain
- D. Plain



2- It is a high landform it **smaller than mountain** .

- A. hill
- B. river
- C. island
- D. plain



3- It is a **low land** between hills and mountains.

- A. Island
- B. plain
- C. valley
- D. lake



4-What are the biggest areas of land ?

- A. mountains
- B. oceans
- C. continents
- D. islands



5-What is this landform?

- A. mountain
- B. island
- C. valley
- D. plain



6- it is one of the **shapes of earth's surface** .

- A. deserts
- B. buildings
- C. landforms
- D. city

7- This **is flat and wide land** .

- A) plain
- B) forest
- C) desert
- D) island



8- Different kinds of land such as mountains and plains.

- A) suburb
- B) map key
- C) compass rose
- D) landforms

9-How should Sara draw a plain

- A. Tall
- B. Flat
- C. Low



10-What is this landform at the next picture?

- A. valley
- B. hills
- C. river
- D. lake



11- A mountain is low land

- A true
- B. false



12-A land which surrounded by water from all sides .

- A. Island
- B. Mountain
- C. Plain
- D. Valley

